

Day 6 Homework

Period _____

Find the EXACT distance between each pair of points. Don't forget to simplify ALL answers! Show your work ALGEBRAICALLY.

1) $(6, -5), (0, -1)$

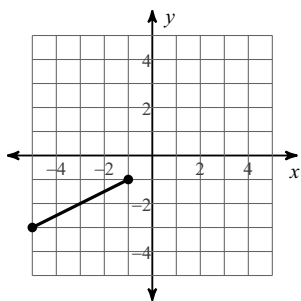
2) $(-4, 7), (-2, 7)$

3) $(-4, -8), (-3, -4)$

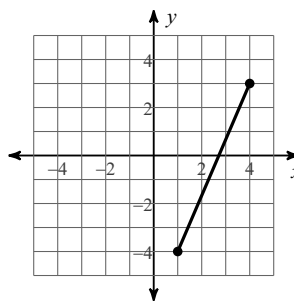
4) $(3, 2), (-1, -6)$

Find the EXACT distance between each pair of points. Don't forget to simplify ALL answers! Show your work GRAPHICALLY.

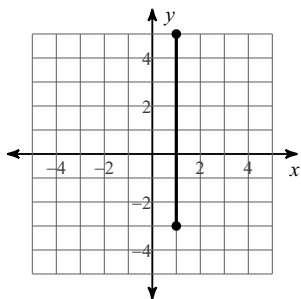
5)



6)



7)



8)

