

Day 2: Graphing Quadratic Inequalities

Date _____

© 2019 Kuta Software LLC. All rights reserved.

1) Now that we are professionals at graphing quadratics from any three forms, we are ready to graph quadratic INEQUALITIES!!

We start off the exact same way. Find the key features (dependent on what form the equation is given) and graph the parabola.

Next we look at the inequality to determine whether to make the line dashed or solid.

Dashed if _____

Solid if _____

Finally we determine where to shade the graph.

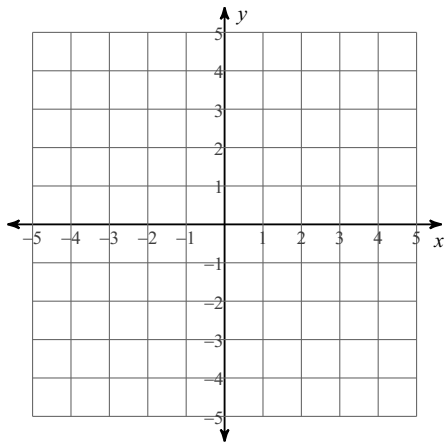
If _____, shade ABOVE the vertex

If _____, shade BELOW the vertex

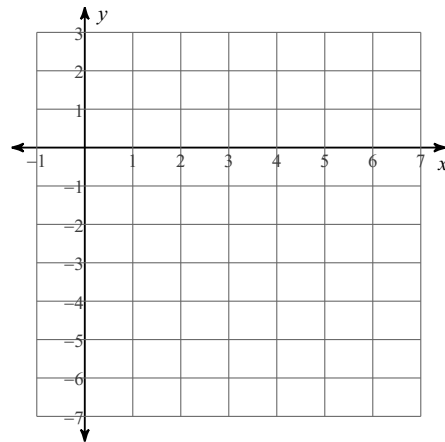
Let's draw some pictures:

Sketch the graph of each quadratic inequality. List all key features.

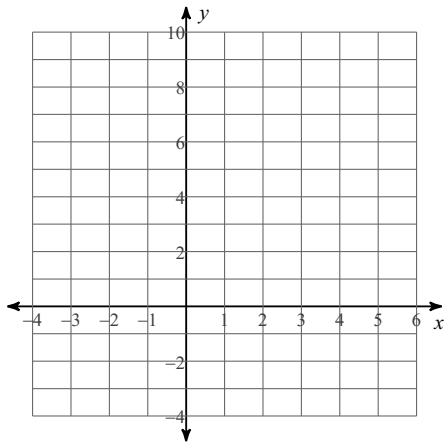
2) $y \geq -(x - 1)(x - 3)$



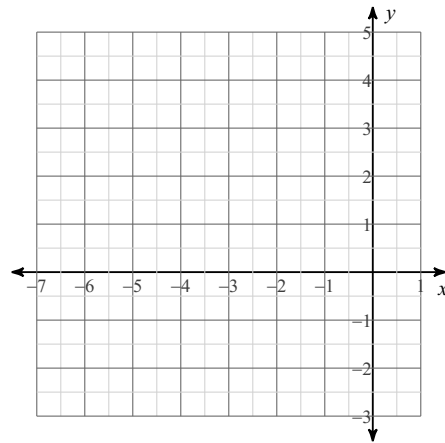
3) $y < -2(x - 2)(x - 4)$



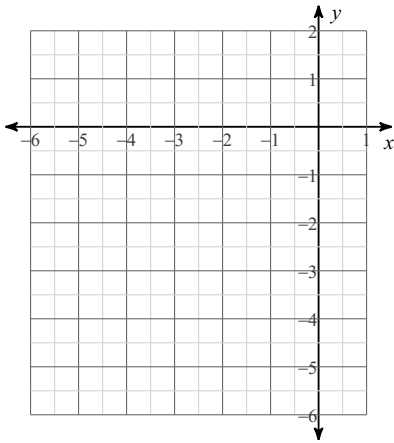
4) $y > 3(x - 3)(x - 1)$



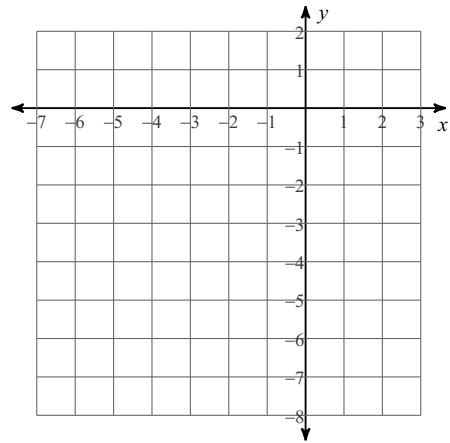
5) $y \leq (x + 5)(x + 3)$



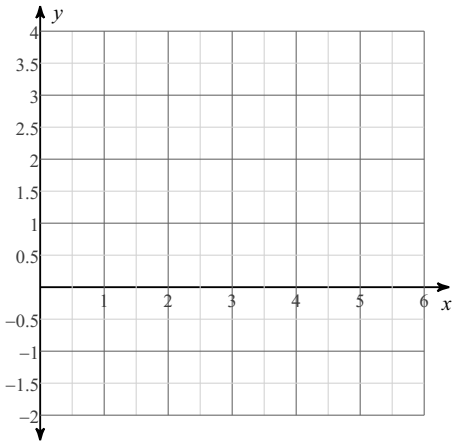
6) $y > (x + 4)^2 - 4$



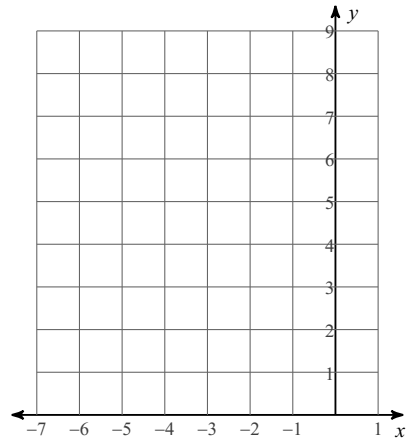
7) $y \geq -2(x + 1)^2 + 1$



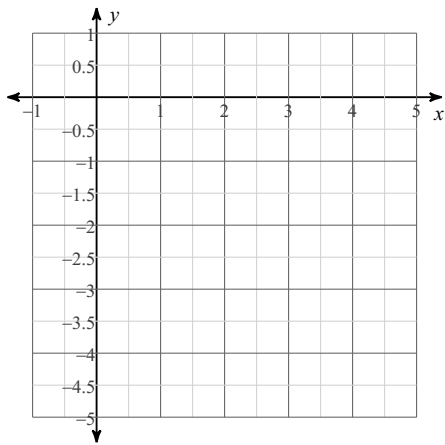
8) $y < -(x - 2)^2 + 3$



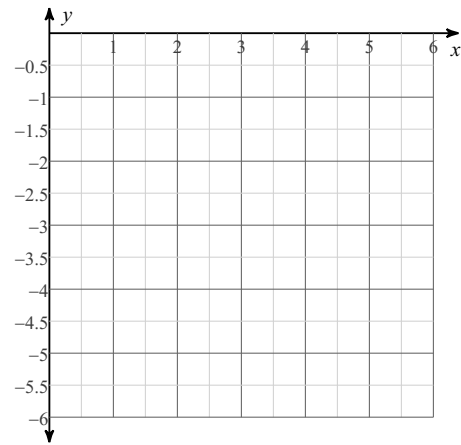
9) $y < (x + 3)^2 + 4$



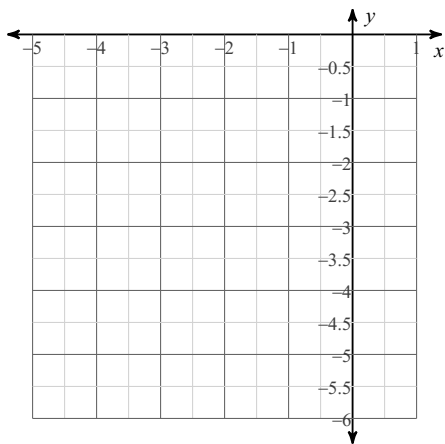
10) $y < x^2 - 4x$



11) $y > -x^2 + 4x - 5$



12) $y \leq -x^2 - 4x - 5$



13) $y \leq 3x^2 + 24x + 49$

