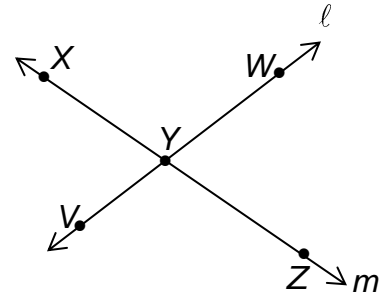


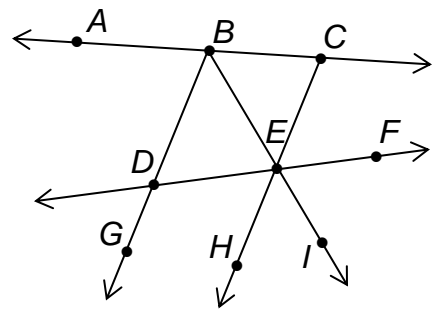
Decide whether the statement is *true* or *false*.

- |   |  |
|---|--|
| 1. Point $X$ lies on line $m$ .                       | 2. $X, Y,$ and $Z$ are collinear.                    |
| 3. Point $W$ lies on line $m$ .                       | 4. $X, Y,$ and $Z$ are coplanar.                     |
| 5. $\overline{YW}$ and $\overline{YV}$ are collinear. | 6. $\overline{YW}$ and $\overline{YV}$ are coplanar. |
| 7. $\overline{YX}$ and $\overline{YV}$ are collinear. | 8. $\overline{YX}$ and $\overline{YV}$ are coplanar. |



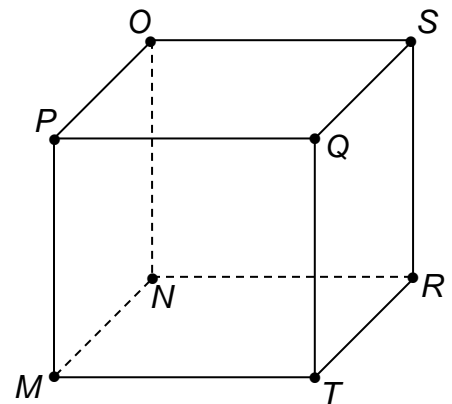
Name a point that is collinear with the given points.

- |                 |                 |
|-----------------|-----------------|
| 9. $B$ and $E$  | 10. $C$ and $H$ |
| 11. $D$ and $G$ | 12. $G$ and $B$ |
| 13. $B$ and $I$ | 14. $A$ and $C$ |



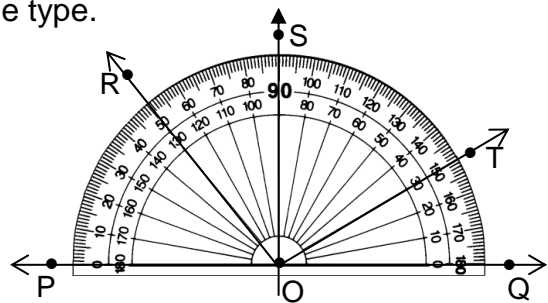
Name a point that is coplanar with the given points.

- |                     |                     |
|---------------------|---------------------|
| 15. $M, N,$ and $R$ | 16. $Q, O,$ and $P$ |
| 17. $T, S,$ and $R$ | 18. $O, P,$ and $M$ |
| 19. $O, S,$ and $R$ | 20. $M, T,$ and $Q$ |



Find the measure of each angle and identify the angle type.

- |                  |       |
|------------------|-------|
| 21. $\angle ROQ$ | _____ |
| 22. $\angle QOS$ | _____ |
| 23. $\angle POQ$ | _____ |
| 24. $\angle SOT$ | _____ |



Sketch the figure described.

25. Three points that are coplanar, but not collinear.

26. Three lines that intersect at a single point.

27. Three lines that intersect at two points.

28. Three lines that intersect at three points.

29. Two planes that intersect.

30. Two planes that do not intersect.

31. Two rays that intersect at their initial points.

32. Two rays that do not intersect.