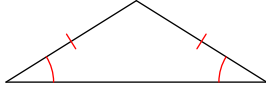


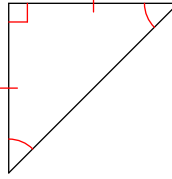
Assignment - Day 1 Classifying Triangles

Classify each triangle by its angles and sides. Equal sides and equal angles, if any, are indicated in each diagram.

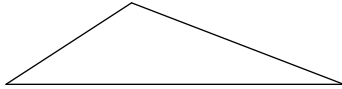
1)



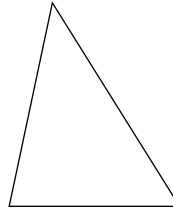
2)



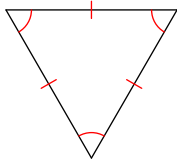
3)



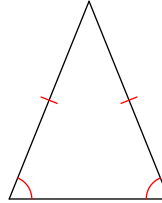
4)



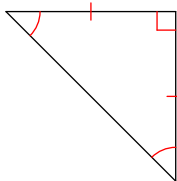
5)



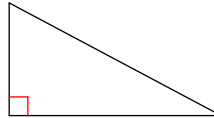
6)



7)

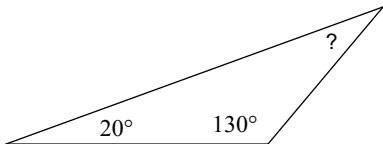


8)

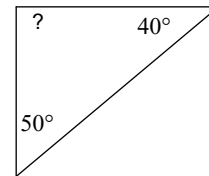


A) Find the measure of each angle indicated then
B) Classify the triangle by its angle and sides.

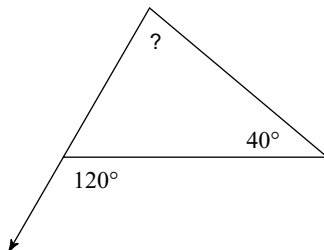
9)



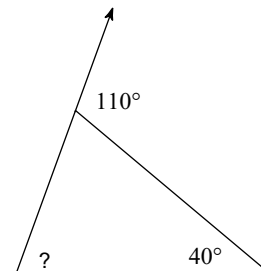
10)



11)

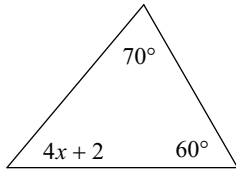


12)

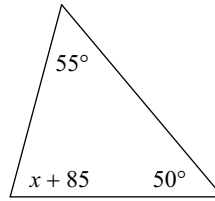


Solve for x .

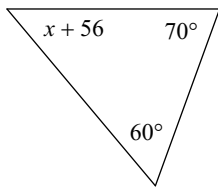
13)



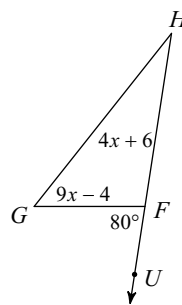
14)



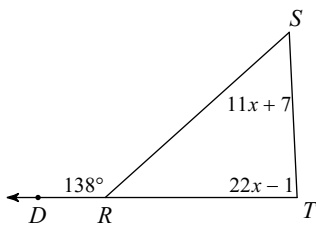
15)



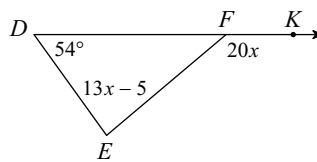
16)



17)



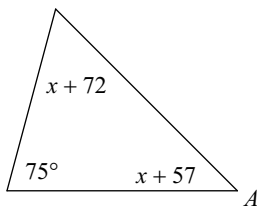
18)



A) Solve for x

B) Find the measure of angle A.

19)



20)

